

Math Live – Proper Fractions: Activity Sheet

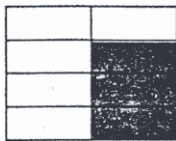
Grade: 4 Strand: Number Outcome: 8

What fraction of each figure is shaded?

1.


$$\frac{\square}{\square}$$

2.


$$\frac{\square}{\square}$$


3.


$$\frac{\square}{\square}$$


4.


$$\frac{\square}{\square}$$

5.


$$\frac{\square}{\square}$$

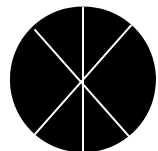
6.


$$\frac{\square}{\square}$$

7.


$$\frac{\square}{\square}$$

8.

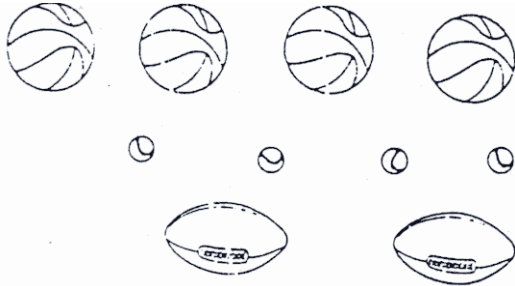

$$\frac{\square}{\square}$$

9. What fraction of the coins are nickels?



$$\frac{\square}{\square}$$


10. What fraction of the balls are footballs?




$$\frac{\square}{\square}$$

11. What fraction of the shirts have short sleeves?




$$\frac{\square}{\square}$$

12. What fraction of the animals are cats?



$$\frac{\square}{\square}$$

13. What fraction of the buttons are coloured?



$$\frac{\square}{\square}$$

Math Live – *Proper Fractions*: Activity Sheet Answer Key

1. $\frac{1}{6}$

2. $\frac{3}{8}$

3. $\frac{2}{8}$

4. $\frac{3}{6}$

5. $\frac{1}{3}$

6. $\frac{4}{10}$

7. $\frac{1}{8}$

8. $\frac{8}{8}$

9. $\frac{3}{5}$

10. $\frac{2}{10}$

11. $\frac{5}{7}$

12. $\frac{2}{3}$

13. $\frac{6}{10}$